



哪些相鄰的數字加起來等於10？用筆圈起來，橫、直、斜均可。

| | | | |
|---|---|---|---|
| 9 | 7 | 1 | 5 |
| 4 | 2 | 6 | 9 |
| 7 | 9 | 1 | 3 |
| 4 | 8 | 2 | 4 |


| | | | |
|---|---|---|---|
| 2 | 1 | 4 | 4 |
| 8 | 9 | 5 | 6 |
| 7 | 2 | 1 | 5 |
| 1 | 3 | 9 | 8 |

| | | | |
|---|---|---|---|
| 1 | 6 | 3 | 4 |
| 3 | 4 | 5 | 5 |
| 2 | 7 | 6 | 3 |
| 1 | 9 | 8 | 7 |


| | | | |
|---|---|---|---|
| 9 | 8 | 5 | 7 |
| 1 | 4 | 6 | 5 |
| 2 | 3 | 4 | 3 |
| 7 | 1 | 8 | 2 |




按照提示把「搗蛋家庭」人物圈起來，橫、直、斜均可。




提示: + +



提示: + +



提示: + +



提示: + +